

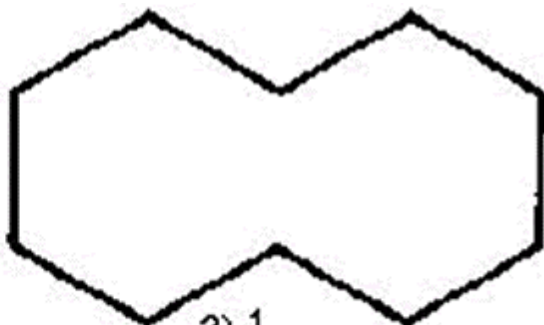
Worksheet Two

Fractions which are the same part of a whole are called **equivalent fractions**.

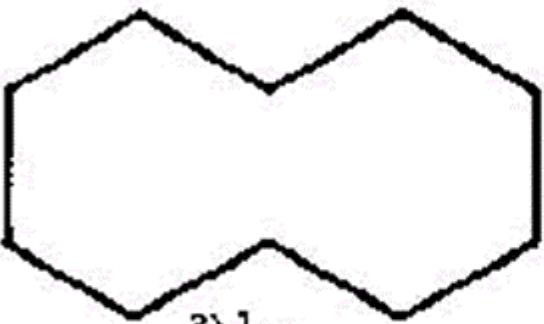
Cover the figures below with pattern blocks. Show that the fractions are equivalent.



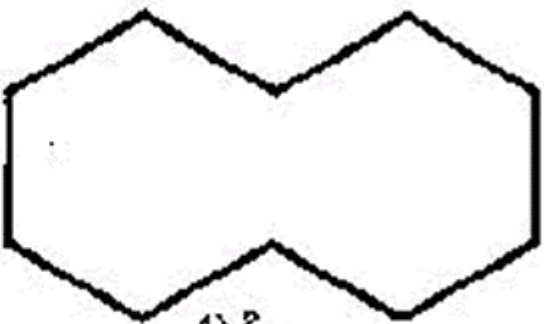
$$1) \frac{1}{2} =$$



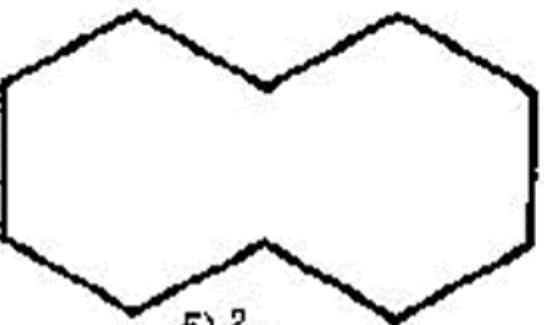
$$2) \frac{1}{2} =$$



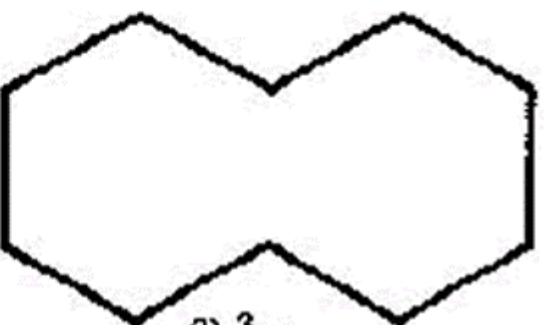
$$3) \frac{1}{2} =$$



$$4) \frac{2}{4} =$$



$$5) \frac{2}{4} =$$



$$6) \frac{3}{6} =$$